

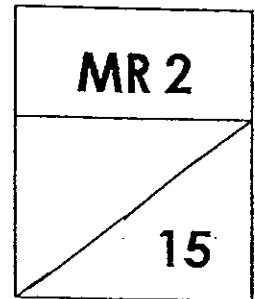
TAO NAN SCHOOL

HOLISTIC ASSESSMENT MATHEMATICS REVIEW (2) 2013

Name: \_\_\_\_\_ ( )

Class : Pr 1 ( )

Date: \_\_\_\_\_



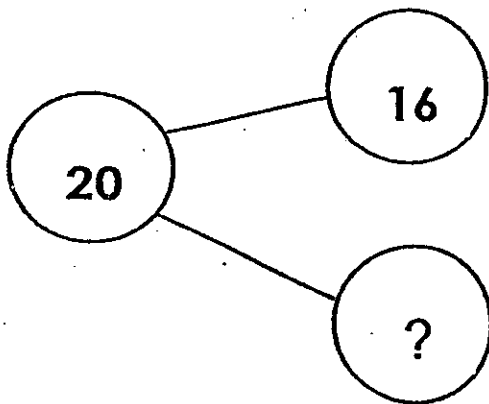
Parent's signature : \_\_\_\_\_

**Section A** (7 x 1 mark)

Choose the correct answer.

Write its number in the brackets provided.

1. What is the missing number?



(1) 1

(2) 2

(3) 3

(4) 4

( )

2. Which number is 3 more than 15?

(1) 12

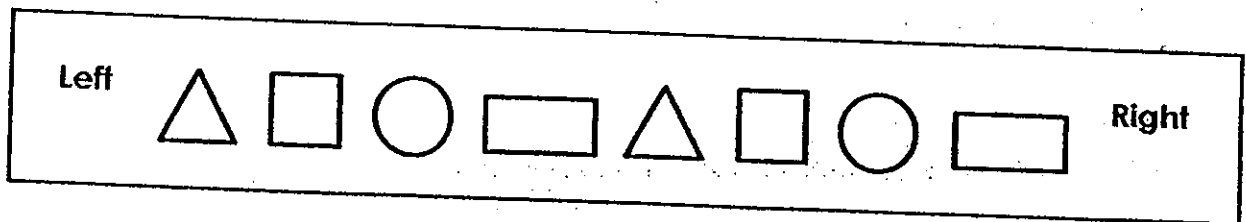
(2) 14

(3) 16

(4) 18

( )

3. Study the picture below carefully.



The 7th shape from the left is \_\_\_\_\_.

(1) circle

(2) square

(3) triangle

(4) rectangle

( )

4.  $20 - 5$  is the same as  $5 + ?$

What is the missing number?

(1) 5

(2) 10


(3) 15

(4) 20

( )

5. Study the picture below carefully.

How many butterflies are left?



(1)  $16 - 2$

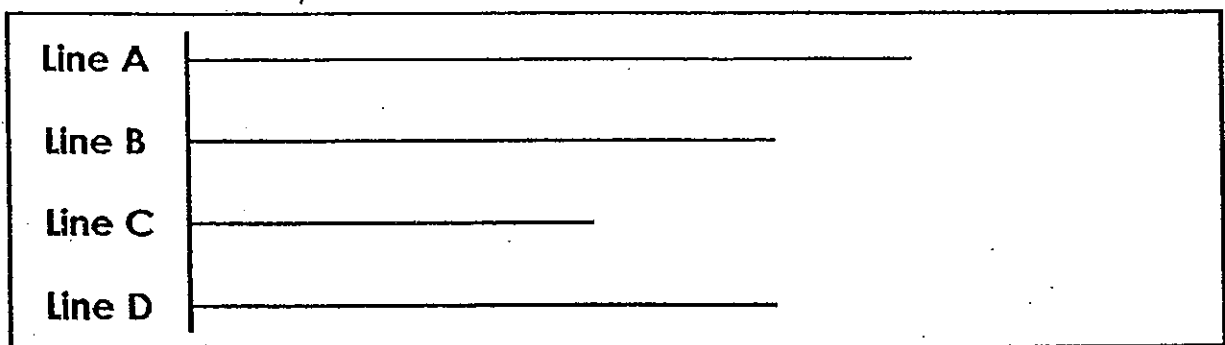
(2)  $16 + 2$

(3)  $18 - 2$

(4)  $18 + 2$

( )

6. Study Line A, B, C and D carefully.



**Line D** is shorter than **Line A** but longer than **Line** \_\_\_\_\_.

(1) A


(2) B

(3) C

(4) D

( )

7. Study the picture below carefully.



Alina is before \_\_\_\_\_.

- (1) Siti
- (2) Linda
- (3) Huiling
- (4) Komala


( )

**Section B** (6 x 1 mark)

Read the questions carefully.


Write your answers in the space provided.

8. Count and write the number in **words**.




There are \_\_\_\_\_ balls.

9. Look at the picture below and fill in the blanks.



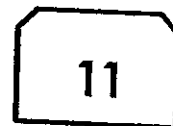

\_\_\_\_\_ ten \_\_\_\_\_ ones.

10. **Circle** the tallest penguin.




11. Arrange these numbers in order.


Begin with the **greatest**.

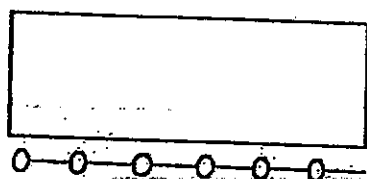


\_\_\_\_\_, \_\_\_\_\_, \_\_\_\_\_, \_\_\_\_\_.  
Greatest

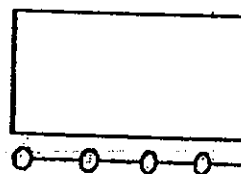
12. **Colour** the kettle which shows a number smaller than 19 but bigger than 15.




13. Each pin  stands for 1 unit.



Rectangle A



Rectangle B

The total length of Rectangle A and Rectangle B is about \_\_\_\_\_  long.

**Section C** (1 x 2 marks)

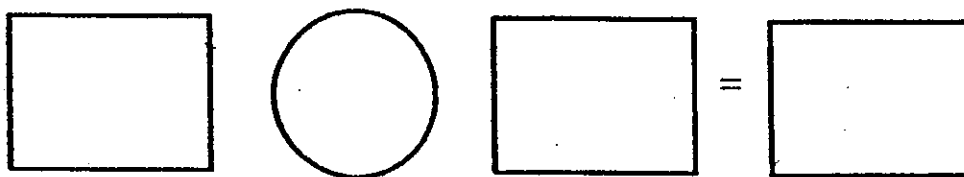
Read the question carefully.

Write your answers in the spaces provided.

14. Mike and Joe have 14 erasers altogether.

Mike has 4 erasers.

How many erasers does Joe have?



Joe has \_\_\_\_\_ erasers.

-End of Paper-





# Answer Ke

EXAM PAPER 2013

SCHOOL : TAO NAN SCHOOL

SUBJECT : PRIMARY 1 MATHEMATICS

TERM : REVIEW 2 (Holistic assessment mathematics review 2)

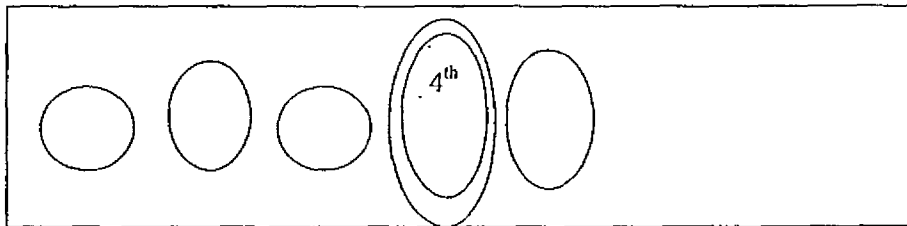
Q1	Q2	Q3	Q4	Q5	Q6	Q7
4	4	1	2	3	3	1

Section B

Q8) twelve

Q9) 1 ten 9 ones

Q10)



Q11) 16, 15, 11, 10

Q12) 17

Q13) 10

Section C

Q14)  $14 - 4 = 10$  erasers

